

EXAMINATIONS COUNCIL OF ESWATINI  
Eswatini Primary Certificate Examination

CANDIDATE  
NAME

--

CENTRE  
NUMBER

--	--	--	--

CANDIDATE  
NUMBER

--	--	--	--

---

**PRACTICAL ARTS AND TECHNOLOGY**

**640/02**

Paper 2

**October/November 2021**

**2 hours**

---

**READ THESE INSTRUCTIONS FIRST**

Write your candidate name, centre number and candidate number on the spaces provided.

Write your answers using a dark blue or black pen in the spaces provided.

This paper consists of **four (4)** sections; (**A, B, C and D**).

Answer all questions in sections **A, B, C and D**.

Do **NOT** use tipp-ex for erasing.

All drawings, graphs and tables should be done in pencil.

The number of marks is given in [ ] at the end of each question.

For Examiner's use	
Section A	
Section B	
Section C	
Section D	
TOTAL	

---

This document consists of **14** printed pages and **2** blank pages.

**SECTION A**  
**ARTS AND CRAFT**

**QUESTION 1**

- (a) **Fig.1** below is a picture of traditional Swazi necklace (*ligcebesha*). Study the diagram and answer the questions that follow:



**Fig.1**

- (i) Name **two** materials used to make the product above.

.....  
.....  
.....[2]

- (ii) Mention **two** traditional eSwatini events where *ligcebesha* is worn.

.....  
.....  
.....[2]

- (iii) How do you ensure safety when making *ligcebesha*?

.....  
.....  
.....[2]

**B.** Name **two** painting tools and state how they are used.

The first one has been done for you.

TOOL	USES
Example: <b>Paint brush</b>	<b>Painting</b>
(i) .....	.....
(ii) .....	.....

[2]

**C.** Name **three** carved products used during a traditional wedding.

(i) .....

(ii).....

(iii).....[3]

**D.** State the importance of color in art. Give two points.

(i) .....

.....

(ii) .....

..... [4]

E. The following are techniques used when designing and crafting products; **weaving, molding, drawing and painting, crocheting, knitting.**

Choose from the given list, the suitable technique to produce the following products:

Product	Technique used to produce it
i. Broom	.....
ii. Winter Socks	.....
iii. Land Scape	.....

[3]

F. In two points, explain why it is important to recycle materials.

.....  
 .....  
 ..... [2]

[Total: 20 Marks]

**SECTION B**  
**MUSIC AND DRAMA**

**QUESTION 2**

**A. Fig. 2** below is a musical instrument. Study the picture and answer the questions that follow:



**Fig. 2**

- (i) State the name of the musical instrument shown in **Fig. 2** above.  
.....[1]
- (ii) Name one group of people or band that plays this kind of instrument in national events.  
..... [1]
- (iii) Give **two** reasons why people play musical instruments.
1. ....  
.....
2. ....  
.....[2]

**B.** Give the **three** basic elements of music.

- (i) .....
- (ii) .....
- (iii) .....[3]

**C.** Explain the difference between a guitar and a drum.

.....

.....

.....

.....

.....

.....[2]

**D.** What is the role of a narrator in a drama?

.....

.....

.....[1]

**E.** Explain the importance of the following in a drama performance:

(i) Costumes.

.....

.....

.....

.....[2]

(ii) Puppets and dolls.

.....

.....

.....[2]

**F.** Compose a script for a drama performance to teach learners on the importance of listening to radio lessons during Corona Virus lockdown.

Give a title of the script performance followed by a write up.

(i) Title:.....  
.....[1]

**(ii)** The Script write up.

This image shows a full page of white paper with horizontal dotted lines, typical of primary school writing paper. The lines are evenly spaced and run across the width of the page. There are no margins, text, or other markings on the paper.

.....  
.....  
.....  
.....  
.....[5]

**[Total: 20 Marks]**



## SECTION C

### ENTREPRENEURIAL SKILLS

#### QUESTION 3

- A. **Fig. 3** below shows a business activity. Study the diagram and answer the questions that follow:



**Fig.3**

- (i) Name the type of the business shown in **Fig. 3** above.

..... [1]

- (ii) What are **two** services provided by this type of business besides hairstyling?

.....  
.....[2]

- (iii) Suggest **two** things that the business owner can do to improve the business.

.....  
.....

.....  
.....[2]

**B.** State **two** reasons why is it important to develop a professional image in a business.

1. ....  
.....
2. ....  
.....[2]

**C.** Explain how the owner of a business can develop a professional image. Give **four** points.

- (i) ....  
.....
- (ii) ....  
.....
- (iii).....  
.....
- (iv).....  
.....[4]

**D.** Suggest **three** advantages of saving money in a business.

.....  
.....  
.....  
.....  
.....  
.....  
.....[3]

**E. Fig. 4** shows a supermarket and **Fig. 5** shows a street vendor.



**Fig. 4**



**Fig. 5**

**(i)** Which one is an example of:

(a) A formal business?

.....[1]

(b) An informal business?

.....[1]

**F.** Differentiate between a formal and informal business. Give two points each.

Formal Business	Informal Business
.....	.....
.....	.....
.....	.....
.....	.....

**[4]**

**[Total: 20 Marks]**

## SECTION D

### TECHNOLOGICAL DESIGN

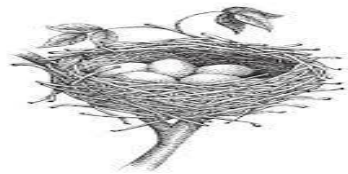

#### QUESTION 4

A. Study the pictures of structures below labelled **A – D** and answer the questions that follow.

**A.**



**B.**



**C.**

**D.**

Fill in the table below. An example has been done for you.

Name of Item	Type of Structure
<b>Example:</b> A. House	Frame Structure
B. Bridge	.....
C. Tortoise	.....
D. Eggs	.....

**[6]**

**B.** Mention **three** reasons why structures are important.

- 1.....  
.....[1]
- 2.....  
.....[1]
- 3.....  
.....[1]

**C.** Banele's house has developed cracks and requires reinforcement.

**(i)** Define reinforcement.

.....  
.....  
..... [1]

**(ii)** Suggest any **three** materials that Banele can use to reinforce the house.

.....  
.....  
.....  
.....  
.....[3]

**(iii)** Explain, in **three** points, the importance of reinforcement when constructing a house.

.....  
.....  
.....  
.....  
.....  
.....[3]

**D.** Explain the difference between a collage and a painted picture.


**(i)** Collage.

.....  
..... **[2]**

**(ii)** Painted picture.

.....  
..... **[2]**

**E.** Design and draw Banele's house with reinforcement.



**[3]**

**[Total: 20 Marks]**

**BLANK**

**BLANK**

---

Permission to reproduce items where third party owned material protected by copyright is included has been sought and cleared where possible. Every reasonable effort has been made by the publisher (ECESWA) to trace copyright holders, but if any items requiring clearance have unwittingly been included, the publisher will be pleased to make amends at the earliest possible opportunity.